

Compare durations of time

1 Write $<$, $>$ or $=$ to compare the durations of time.

a) 50 minutes 1 hour

b) quarter of an hour 15 minutes

c) half an hour 25 minutes

2 Write the times in order from shortest to longest.

90 minutes

one hour

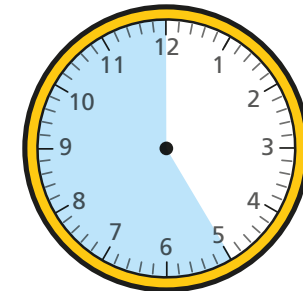
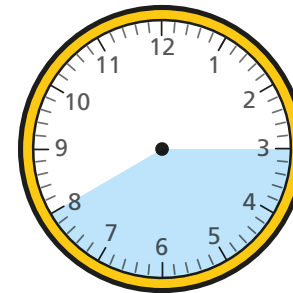
45 minutes

shortest _____

longest _____

3 Circle all the durations of time that are longer than half an hour.

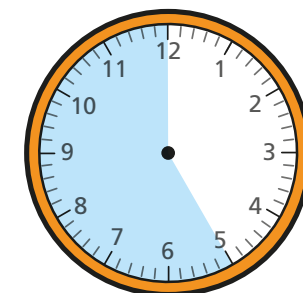
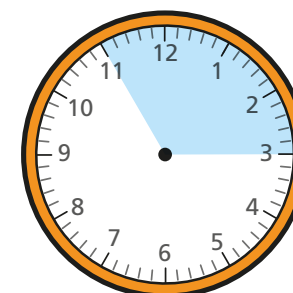
35 minutes



three-quarters of an hour


4 Circle all the durations of time that are shorter than half an hour.

25 minutes



three-quarters of an hour


- 5 The clocks show the times that Ron and Teddy started and finished tidying their rooms.



Who tidied their room in the shortest amount of time? _____

How did you work this out? _____

- 6 Aisha and Kim both started their homework at 6 o'clock.



Aisha finished her homework at 25 past 6
Kim's homework took her 10 minutes longer.
What time did Kim finish her homework?


- 7 The children in Class 2 ran around the edge of the school field.

The table shows their start and finish times.

Name	Start time	Finish time
Tommy	10 past 2	half past 2
Amir	quarter past 2	half past 2
Dora	20 past 2	quarter to 3
Rosie	20 past 2	20 to 3

Use the information in the table to complete the sentences.

- a) _____ took the longest time.
- b) _____ took the shortest time.
- c) Tommy ran faster than _____.
- d)



Tommy

Amir and I
took the same length
of time because we
finished together.

Is Tommy correct? _____

How do you know? _____