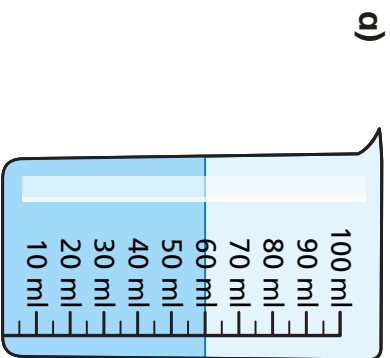
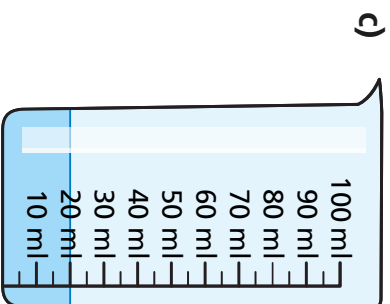


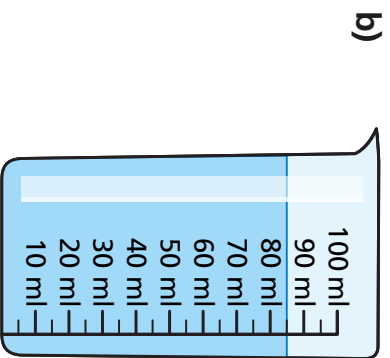
1 How much water is there in each beaker?



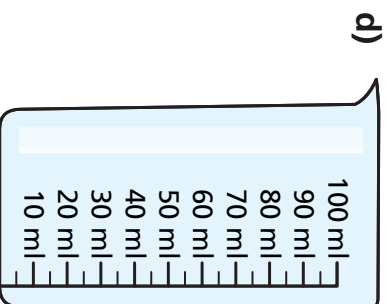
ml



ml

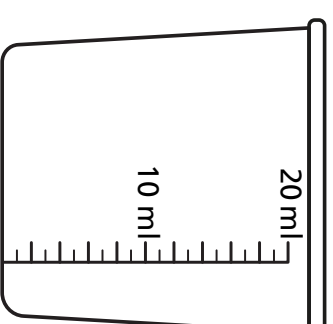


ml



ml

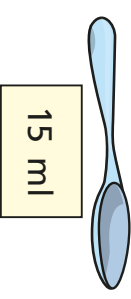

2 Jack pours 12 ml of water into a measuring container.



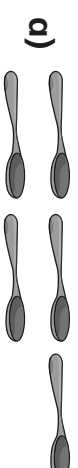
Draw a line to show where the water reaches.

3 A teaspoon holds 5 ml.

A tablespoon holds 15 ml.



Work out the total capacity of the spoons.



ml



ml



ml



- 4 A recipe includes 45 ml of lemon juice.



I can  
measure this using  
a teaspoon.



teaspoon 5 ml



tablespoon 15 ml

Dora


- a) How many teaspoons is 45 ml?

- b) Find another way of measuring 45 ml.  
Circle your answer.

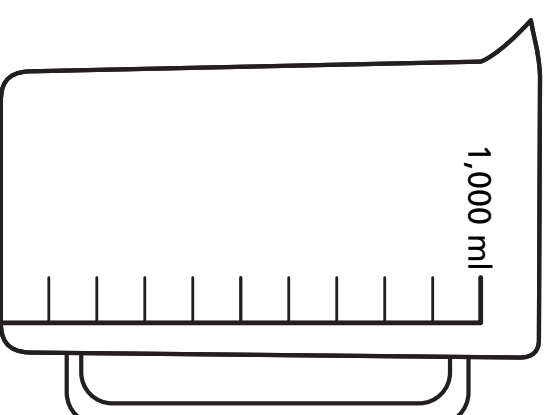


- 5 How can you work out  
the capacity of an egg cup?

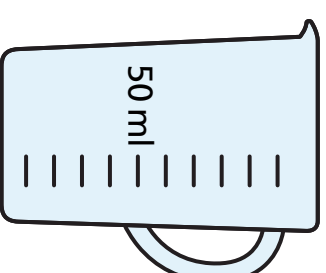
Talk about it with a partner.



- 6 Draw a line on the jug to show where 500 ml  
of juice would reach.



- 7 Mo opens a can of drink.  
He pours it all into a measuring jug.



Draw a line to show where the drink will reach.

